



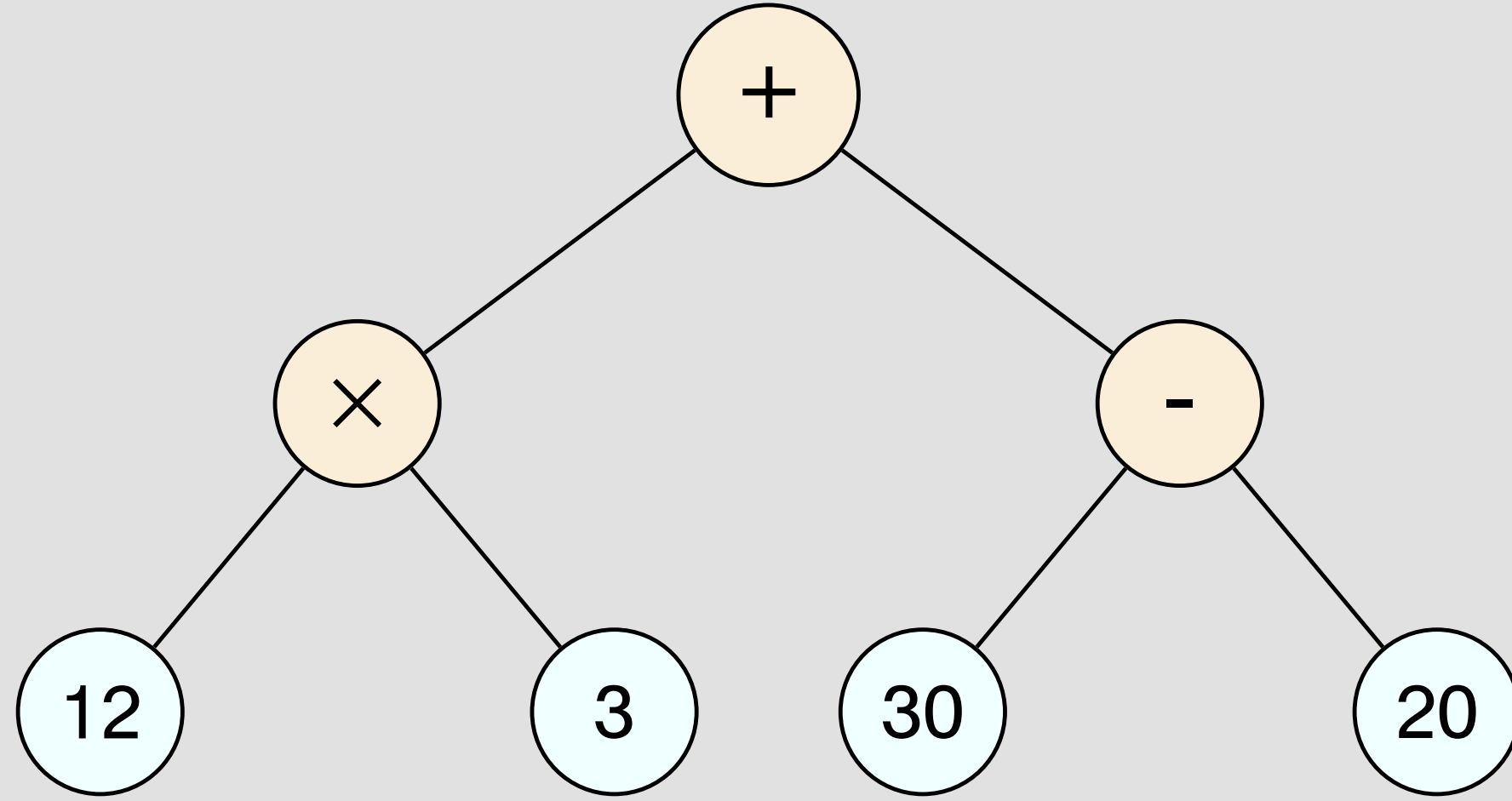
## இயல் 6.6 - தகவல் செயலாக்கம்

பயிற்சி எண் :: 6.6.2.1.F

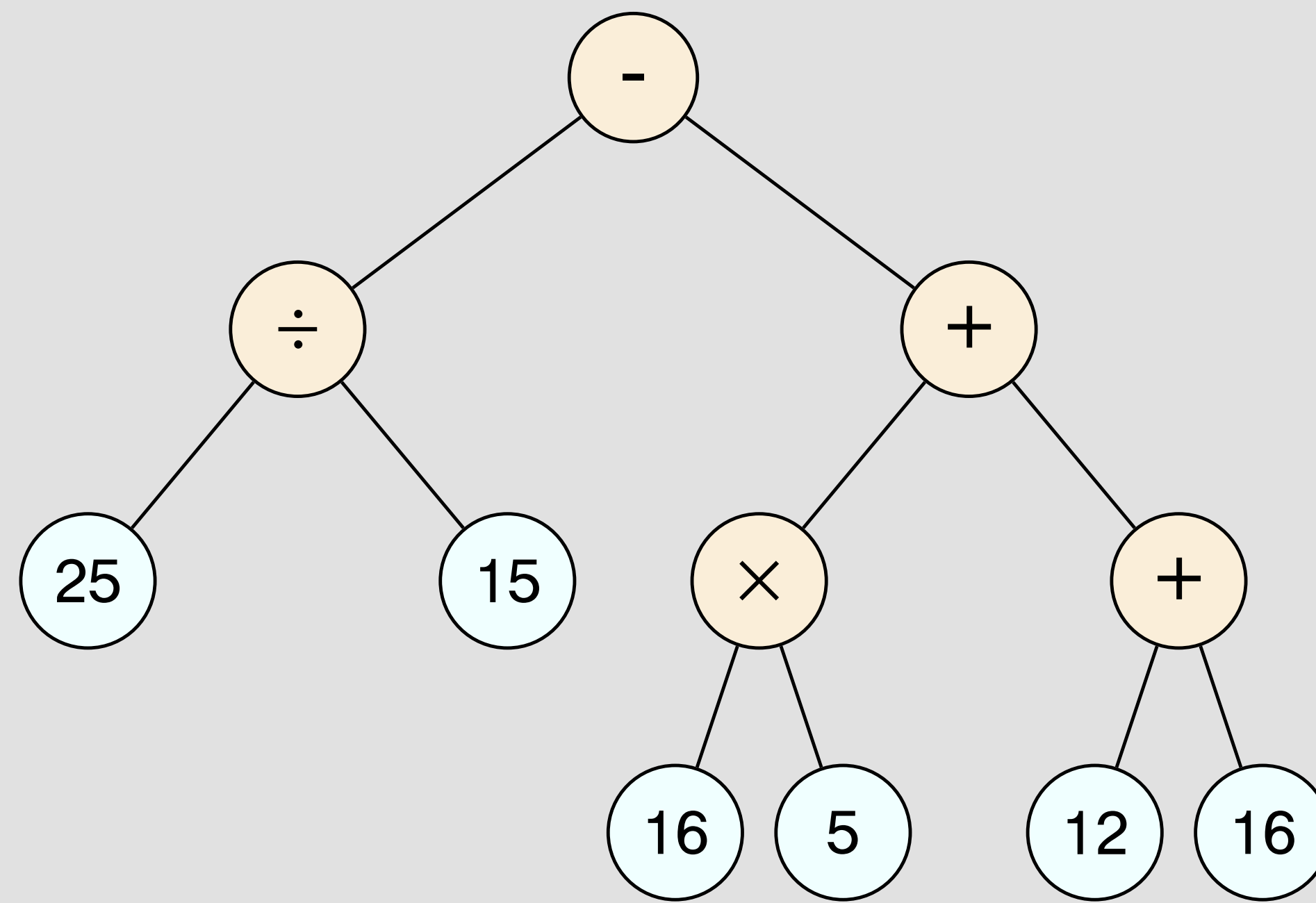
தகவல் செயலாக்கம் - மரவுரு வரைபடம் - பயிற்சி

### தகவல் செயலாக்கம் - மரவுரு வரைபடம் - பயிற்சி

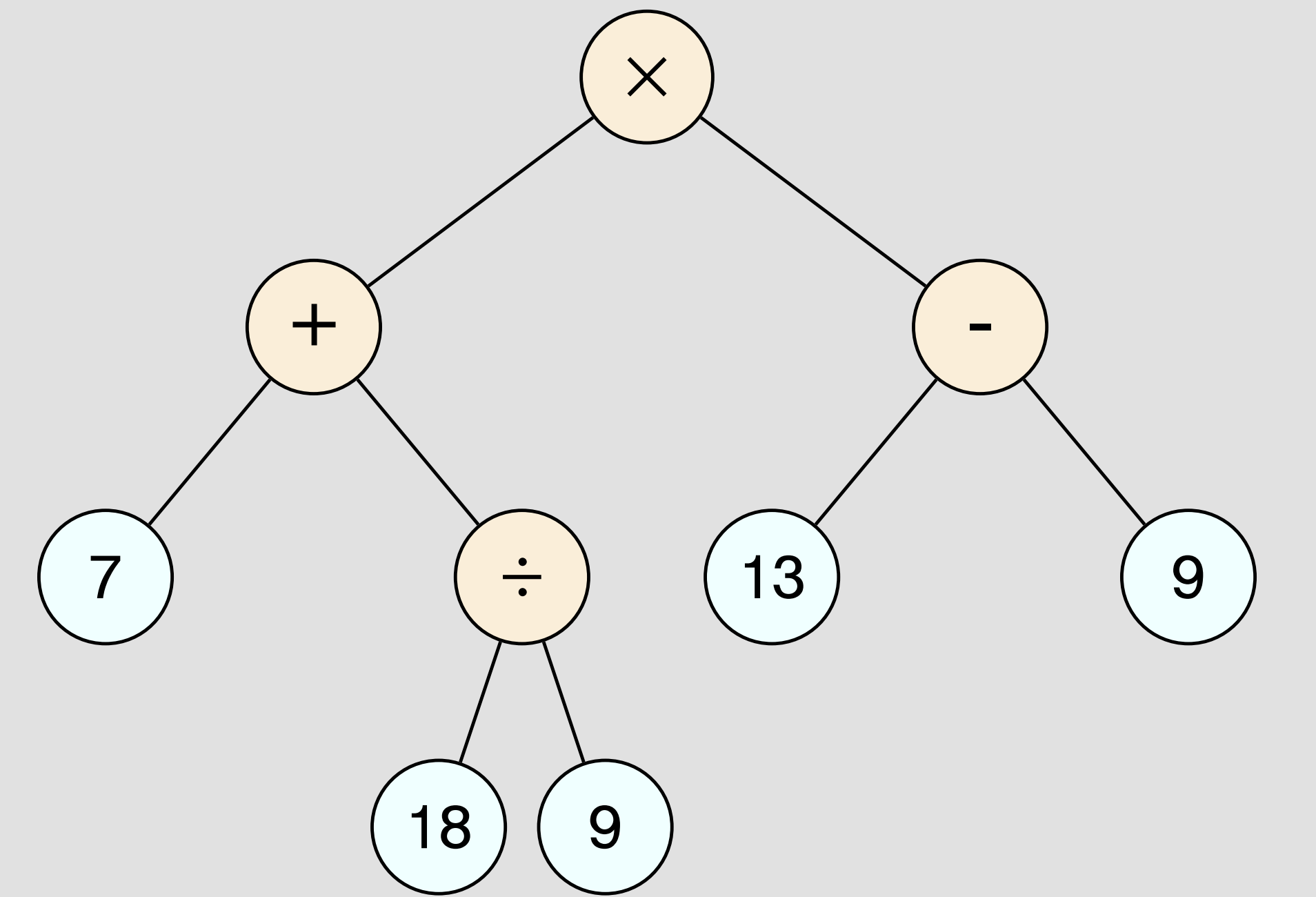
கீழ்க்காணும் மரவுரு வரைபடங்களை எண் கோவைகளாக மாற்றுக.



$$(12 \times 3) + (30 - 20)$$



$$(25 \div 15) - \{(16 \times 5) + (12 + 16)\}$$



$$\{7 + (18 \div 9)\} \times (13 - 9)$$

### Information Rights & Disclaimers

Sum & solution prepared on Thursday 30<sup>th</sup> December, 2021 :: 17:38 Hrs.

All rights related to all contents given in this website and in all its links such as Structure, problem creation, problem presentation, solution, solution presentation, presentation style, solution model given in the PDFs & Videos, voice over content, style of presentation, Video creation & its theme, presentation, presentation style and model are reserved to;

V K Ramaswamy Iyengar & Chellammal Educational Trust, Coimbatore - 641 046, Tamilnadu, INDIA. Read :: 4/16/2020 dt. January 31, 2020.

<https://ramaswamyhellammaltrust.org> § [info@ramaswamyhellammaltrust.org](mailto:info@ramaswamyhellammaltrust.org)

Being the very purpose; viewing, browsing and downloading the contents for learning, training, coaching and teaching purpose are jointly and severally **well permitted**. However, doing so for commercial purpose(s) is/are **strictly prohibited**.